


SOCIAL STUDIES GRADE FOUR HOMEWORK ASSIGNMENTS 2020

NATURAL AND BUILT ENVIRONMENT


1. NATURAL ENVIRONMENT

WEEK 1

Activity 1: Draw and label the four main points of a compass.



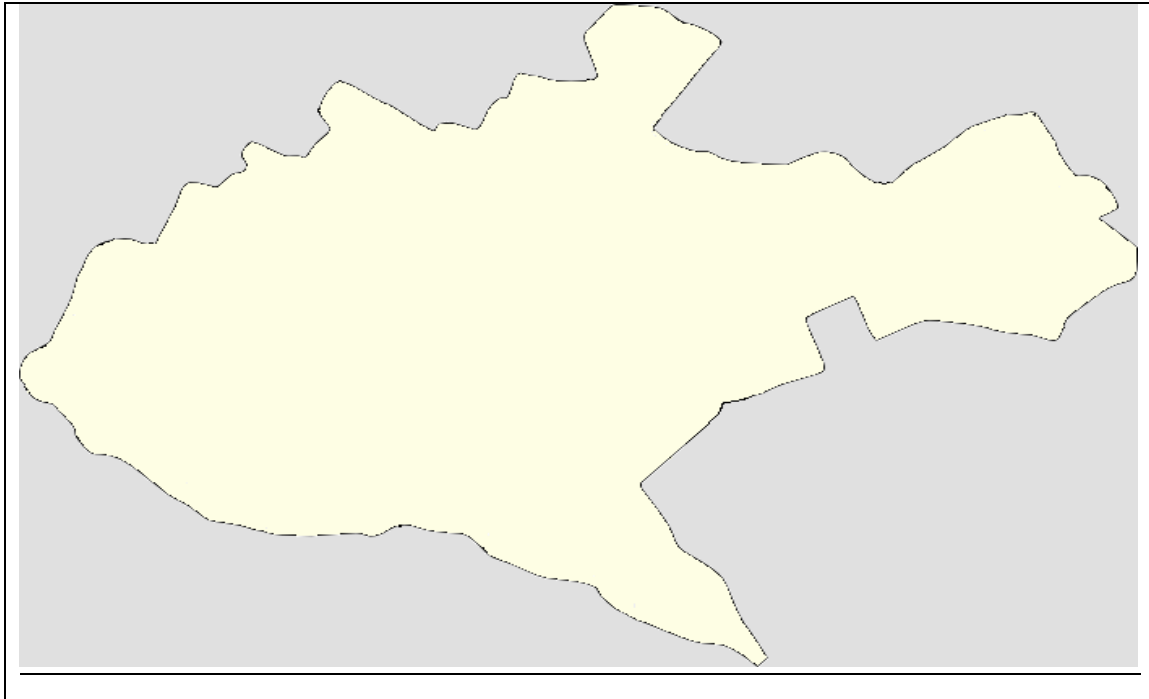
Activity 2; Draw and label the eight points of a compass.



- a) The point of the compass between South and West is called _____.
- b) The point of the compass between North and West is called _____.
- c) The point of the compass between East and South is called _____.
- d) The point of the compass between East and North is called _____.

WEEK 1

Activity 3; The map below shows the Nairobi City County. Label Machakos County, Kiambu County and Kajiado County.



WEEK 2

Activity 1; Study the picture below and name any four physical features you can see.



- i. _____
- ii. _____
- iii. _____
- iv. _____

Activity 2; Study the map of Korona area below and answer the questions below.



- i. What is the name given to the four main points of a compass?

- ii. Using the compass on the map of Korona area, state the direction of:
 - a) Rehema area is to the _____ of Korona area.
 - b) _____ is to the West of Molio area
 - c) _____ is to the North of Korona area.
 - d) _____ is to the South West of Korona area.

Activity 3; Our Country Kenya is divided into 47 Counties.

Study the map below and colour our county green, Kiambu county red, Machakos County yellow and Kajiado county brown.



WEEK 3

Activity 1; Using the map below, Identify all the sub counties in Nairobi city county.



Activity 2; List down physical features below that are found in Nairobi City County only.

a) Valleys

- i. _____
- ii. _____
- iii. _____

b) Hills

- i. _____
- ii. _____
- iii. _____

c) Rivers

- i. _____
- ii. _____
- iii. _____

d) Plains

- i. _____
- ii. _____
- iii. _____

Activity 3; List down any five importance of physical features in our county.

- i. _____
- ii. _____
- iii. _____
- iv. _____
- v. _____

WEEK 4

Activity 1; Using your own creativity make a poster that can be used to encourage people in your neighbourhood to conserve our environment. (20marks)

Activity 2; Study the weather wheel below and use it to answer the questions that follow

1. a long period of time over which one type of weather is experienced is called a _____.
2. The two main seasons experienced in our county are _____ and _____ seasons.
3. List down the rainy months in our county.
 - I. _____
 - II. _____
 - III. _____
 - IV. _____
 - V. _____
 - VI. _____

Activity 3; Study the pictures below and write the season when the activities are done in our county.









WEEK 5

Activity 1; Discuss with your parents the four effects of each of the following seasons.

a) Wet season

- v. _____
- vi. _____
- vii. _____
- viii. _____

b) Dry season

- i. _____
- ii. _____
- iii. _____
- iv. _____

BUILT ENVIRONMENT

Historic environments in our county

Activity 2; List down any six historical buildings you have ever visited.

- i. _____
- ii. _____
- iii. _____
- iv. _____
- v. _____
- vi. _____

Activity 3; List down any four of the following historical built environments in our county.

a) Museums

- i. _____
- ii. _____
- iii. _____
- iv. _____

b) Historic monuments

- i. _____
- ii. _____
- iii. _____
- iv. _____

c) Cultural centre

- i. _____
- ii. _____
- iii. _____
- iv. _____

Activity 4; Identify by naming the following historical and built environment in our county.

